


Handwriting Lines to write your poem on.

Remember to sit letters on the line

The image shows a series of horizontal lines for handwriting practice. There are 10 sets of lines, each consisting of a solid red top line, a dashed blue middle line, and a solid blue bottom line. The lines are evenly spaced and extend across the width of the page. On the left side, there are two small grey diagonal marks, one near the third set of lines and one near the tenth set, possibly indicating where to hold a pencil or a fold line.

Find the video tutorials here. Watch these before completing the worksheets.

<https://whiterosemaths.com/homelearning/year-1/>

Monday worksheets:

<https://resources.whiterosemaths.com/wp-content/uploads/2020/05/Lesson-1-Compare-lengths-and-heights-2019.pdf>

Tuesday Worksheets:

<https://resources.whiterosemaths.com/wp-content/uploads/2020/05/Lesson-2-Measure-length-1-2019.pdf>

Wednesday worksheets:

<https://resources.whiterosemaths.com/wp-content/uploads/2020/05/Lesson-3-Measure-length-2-2019.pdf>

Thursday worksheets:

<https://resources.whiterosemaths.com/wp-content/uploads/2020/05/Lesson-4-Introduce-weight-and-mass-2019.pdf>

Daily Big Maths / Speed Maths

Name:

Year 1 - 30 seconds

BIG MATHS...
BEAT THAT!

My 'Beat That'
score was...



$7 + 2 =$	$1 + 9 =$	$5 + 3 =$
$4 + 6 =$	$8 + 8 =$	$3 + 7 =$
$4 + 3 =$	$9 + 2 =$	$2 + 8 =$
$9 + 9 =$	$5 + 5 =$	$5 + 2 =$
$6 + 3 =$	$7 + 7 =$	$6 + 6 =$
$4 + 2 =$		$6 + 2 =$

Name:

Year 1 - 30 seconds

BIG MATHS...
BEAT THAT!

My 'Beat That'
score was...

17

$7 + 2 =$	$1 + 9 =$	$5 + 3 =$
$4 + 6 =$	$8 + 8 =$	$3 + 7 =$
$4 + 3 =$	$9 + 2 =$	$2 + 8 =$
$9 + 9 =$	$5 + 5 =$	$5 + 2 =$
$6 + 3 =$	$7 + 7 =$	$6 + 6 =$
$4 + 2 =$		$6 + 2 =$

Name:

Year 1 - 30 seconds

BIG MATHS...
BEAT THAT!

My 'Beat That'
score was...

17

$7 + 2 =$	$1 + 9 =$	$5 + 3 =$
$4 + 6 =$	$8 + 8 =$	$3 + 7 =$
$4 + 3 =$	$9 + 2 =$	$2 + 8 =$
$9 + 9 =$	$5 + 5 =$	$5 + 2 =$
$6 + 3 =$	$7 + 7 =$	$6 + 6 =$
$4 + 2 =$		$6 + 2 =$

Name:

Year 1 - 30 seconds

BIG MATHS...
BEAT THAT!

My 'Beat That'
score was...



$7 + 2 =$	$1 + 9 =$	$5 + 3 =$
$4 + 6 =$	$8 + 8 =$	$3 + 7 =$
$4 + 3 =$	$9 + 2 =$	$2 + 8 =$
$9 + 9 =$	$5 + 5 =$	$5 + 2 =$
$6 + 3 =$	$7 + 7 =$	$6 + 6 =$
$4 + 2 =$		$6 + 2 =$

Name:

Year 1 - 30 seconds


BIG MATHS...
BEAT THAT!

My 'Beat That'
score was...







$7 + 2 =$	$1 + 9 =$	$5 + 3 =$
$4 + 6 =$	$8 + 8 =$	$3 + 7 =$
$4 + 3 =$	$9 + 2 =$	$2 + 8 =$
$9 + 9 =$	$5 + 5 =$	$5 + 2 =$
$6 + 3 =$	$7 + 7 =$	$6 + 6 =$
$4 + 2 =$		$6 + 2 =$

PUT RUBBISH



IN THE BIN!

WALT / NOD: Create a tally chart about what people like. Ask and answer in Welsh.

Wyt ti'n hoffi sglodion?		
Wyt ti'n hoffi pysgod?		
Wyt ti'n hoffi selsig?		
Wyt ti'n hoffi cyrri?		
Wyt ti'n hoffi nygets?	